

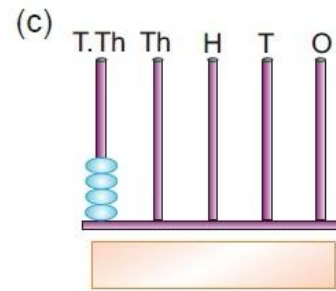
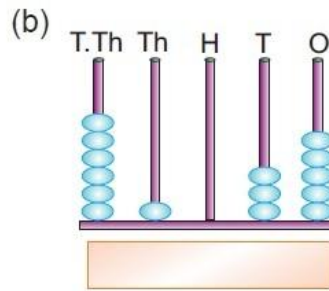
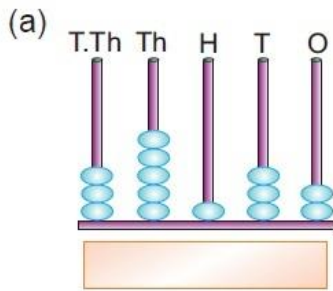
Class-4

Holiday homework

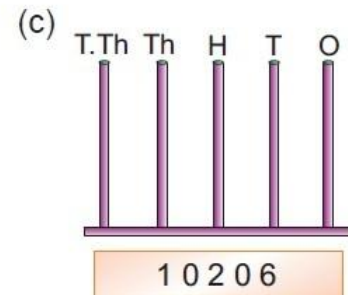
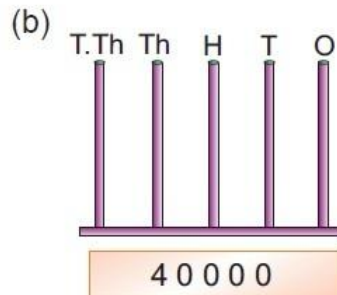
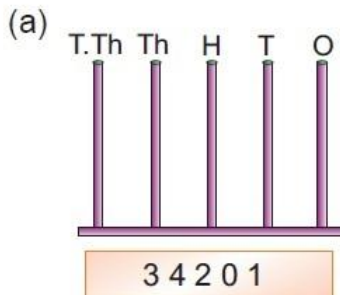
Chapter-1

NUMBERS UP TO 9 99 999

1. Write the numbers represented on the following abacus.



2. Represent the following numbers on the abacus.



3. Write the number names for the given numerals.

(a) 25002 (b) 800000 (c) 51008 (d) 521381

4. Write the numerals for the given number names.

(a) Fifteen thousand four hundred sixty five.

(b) Nineteen thousand three hundred fourteen.

(c) Five lakh.

(d) Forty seven thousand two.

5. Write down the greatest number of 5-digits and the smallest number of 6-digits. How much is the difference between the two?

6. Given below are some numerals. Draw a neat place value chart and enter these numerals in it.

(a) 84621 (b) 493 (c) 832401 (d) 7777

7. Write down the place value of the digit in Red Colour.

(a) 3**4**91 (b) 8**0**109 (c) **3**21893 (d) 65**0**5

8. Rewrite the following numerals using commas between periods.

(a) 91409 (b) 113625 (c) 824300 (d) 98461

(e) 310008 (f) 444444 (g) 100000 (h) 505001

9. Write the following numerals in expanded form in three different ways.

(a) 91,409 (b) 1,13,625 (c) 8,24,307 (d) 98,461

(e) 3,10,008 (f) 4,44,444 (g) 8,00,134 (h) 9,00,009

10. Rewrite each set of numerals in ascending order.

(a) 50,050; 50,500; 55,000; 5,005

(b) 71,309; 17,309; 71,903; 17,903

(c) 4,38,654; 43,865; 4,83,654; 4,38,546

(d) 2,20,222; 20,002; 22,020; 2,02,202

Chapter-2

ADDITION AND SUBTRACTION

1. Arrange in columns and add.

(a) 3,53,175; 25,130 and 1,40,535 (b) 8,20,015; 17,057 and 1,30,155

(c) 2,535; 123 and 6,53,313 (d) 444; 4,444 and 4,44,444

3. The cost of a black and white T.V. set is Rs. 3,690. The cost of a colour T.V. set is Rs. 12,810 more than the cost of black and white T.V. set. Find the total cost of T.V. sets.

4. Raman purchased a house for Rs. 6,65,700. He spent Rs. 2,975 on its repairs. Find the amount he spent in all.

5. Subtract.

(a) 78,321 from 85,213 (b) 96,570 from 97,295 (c) 62,783 from 71,057 (d) 88,732 from 89,560 (e) 42,150 from 50,000 (f) 53,008 from 79,096

6. There are 48,570 plants in a nursery. Its adjoining nursery has 51,257 plants. Which nursery has more plants and by how much?

7. In 2011, the population of a town was 5,75,890. If the number of males was 2,98,170, find the number of females in the town.

Project Work

Amol, Deepak and Krishna were good friends. Of these three friends, Krishna was very poor. He was not able to buy new books and new set of uniform for his new class. Amol and Deepak wanted to help Krishna. They spoke to their parents and gave ₹ 1,250 and ₹ 1,075 to Krishna. It helped Krishna buy books and uniform for the new class.



1. How much money did Amol and Deepak give to Krishna?
2. If Krishna needed ₹ 2,000 for his new books and uniform, how much money is left with him?
3. How do you feel when you help others?

Video Tutorial Link For Chapter 1 and 2

Chapter-1

1. <https://www.youtube.com/watch?v=SBjVSzSmDf0&feature=youtu.be>
2. <https://www.youtube.com/watch?v=FuHRd4nntB8&feature=youtu.be>
3. <https://www.youtube.com/watch?v=tm70Tnr-G7g&feature=youtu.be>
4. <https://www.youtube.com/watch?v=I6DpJ23u5dU>

5. <https://www.youtube.com/watch?v=xh41ExA2wgg>
6. <https://www.youtube.com/watch?v=X9D1zfEWMJA>
7. <https://www.youtube.com/watch?v=jpL4v5II04U>
8. <https://www.youtube.com/watch?v=oWrmTAbmXfA>
9. <https://www.youtube.com/watch?v=nyMz1RhpKOY>
10. https://www.youtube.com/watch?v=LlqX-gZ_fME

Chapter-2

1. <https://www.youtube.com/watch?v=o-RIBVGAeA4>
2. https://www.youtube.com/watch?v=u_8Xna8WvTs
3. <https://www.youtube.com/watch?v=7kSUODMgR3M>

Youtube Channel Link For Next tutorial

<https://www.youtube.com/channel/UCDE8DWeXwPuPe4xO0Rv99Dw/videos>